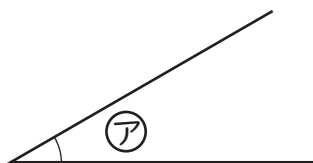


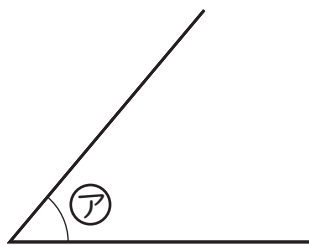
● (ア)の角度をはかりましょう。

1



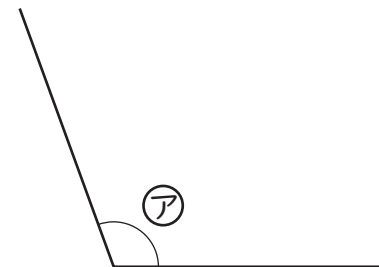
( 30° )

2



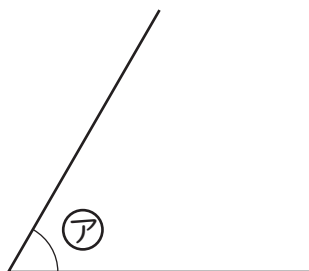
( 50° )

3



( 110° )

4



( 60° )

5



( 160° )

6



( 180° )