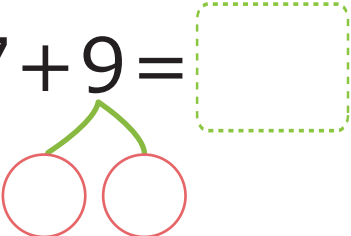
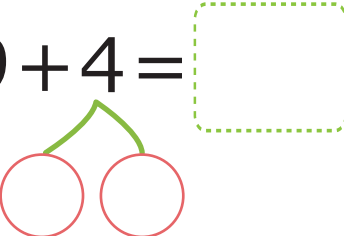
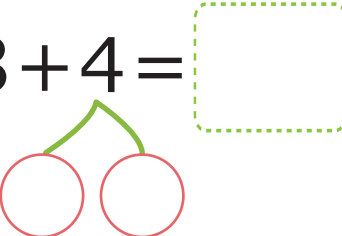
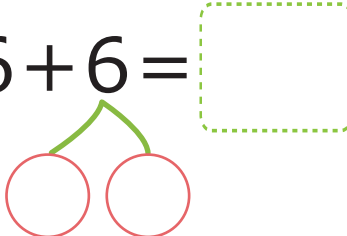
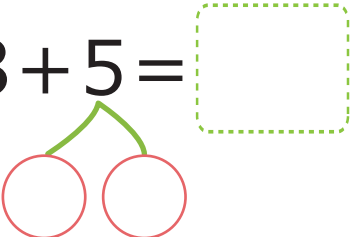


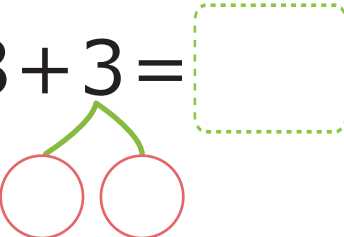
$$(1) 7 + 9 = \square$$


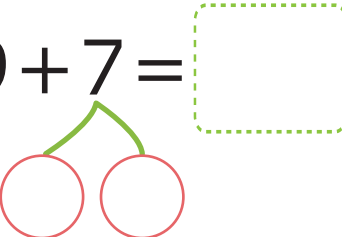
$$(5) 9 + 4 = \square$$


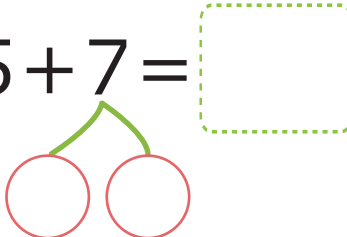
$$(9) 8 + 4 = \square$$


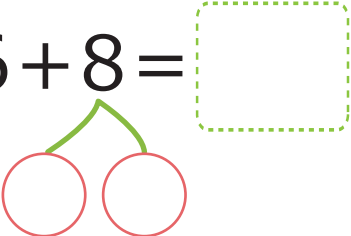
$$(13) 6 + 6 = \square$$


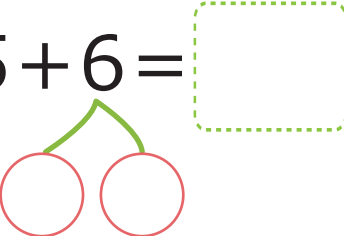
$$(2) 8 + 5 = \square$$


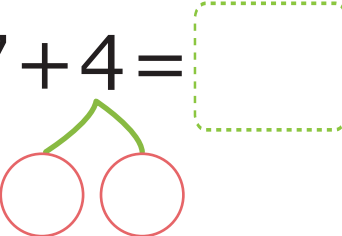
$$(6) 8 + 3 = \square$$


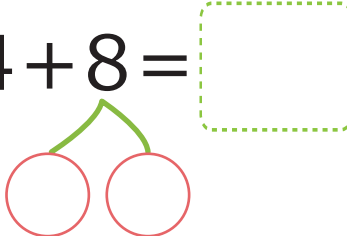
$$(10) 9 + 7 = \square$$


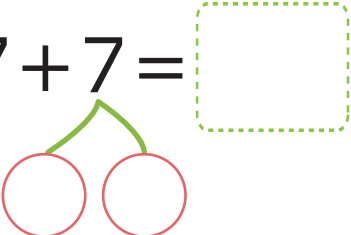
$$(14) 5 + 7 = \square$$



$$(3) 6 + 8 = \square$$


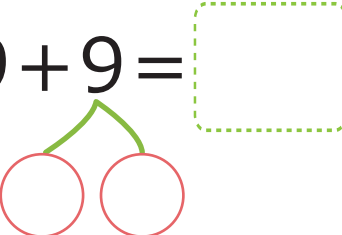
$$(7) 5 + 6 = \square$$


$$(11) 7 + 4 = \square$$


$$(15) 4 + 8 = \square$$


$$(4) 7 + 7 = \square$$


$$(8) 6 + 7 = \square$$


$$(12) 9 + 9 = \square$$


$$(16) 9 + 3 = \square$$
