







$$(1) 9 + 8 = \square$$



$$(5) 8 + 6 = \square$$



$$(9) 7 + 7 = \square$$



$$(13) 4 + 8 = \square$$



$$(2) 5 + 7 = \square$$



$$(6) 7 + 8 = \square$$



$$(10) 8 + 6 = \square$$



$$(14) 8 + 3 = \square$$



$$(3) 3 + 8 = \square$$



$$(7) 9 + 6 = \square$$


$$(11) 8 + 5 = \square$$


$$(15) 2 + 9 = \square$$


$$(4) 6 + 5 = \square$$


$$(8) 6 + 7 = \square$$


$$(12) 4 + 9 = \square$$


$$(16) 4 + 8 = \square$$
