

$$(1) 2 + 9 = \square$$

8 1

$$(5) 6 + 9 = \square$$

4 5

$$(9) 3 + 8 = \square$$

7 1

$$(13) 7 + 8 = \square$$

3 5

$$(2) 3 + 9 = \square$$

7 2

$$(6) 7 + 9 = \square$$

3 6

$$(10) 4 + 8 = \square$$

6 2

$$(14) 8 + 8 = \square$$

2 6

$$(3) 4 + 9 = \square$$

6 3

$$(7) 8 + 9 = \square$$

2 7

$$(11) 5 + 8 = \square$$

5 3

$$(15) 9 + 8 = \square$$

1 7

$$(4) 5 + 9 = \square$$

5 4

$$(8) 9 + 9 = \square$$

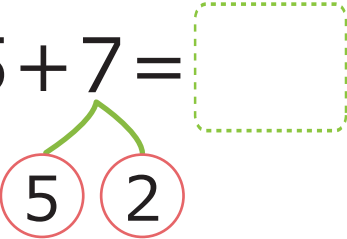
1 8

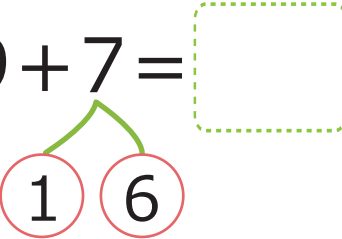
$$(12) 6 + 8 = \square$$

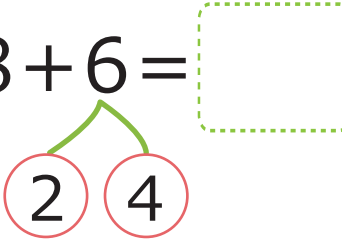
4 4

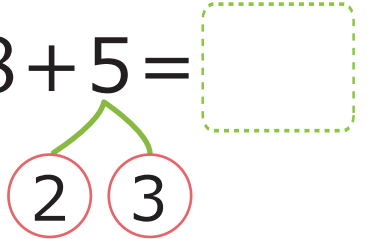
$$(16) 4 + 7 = \square$$

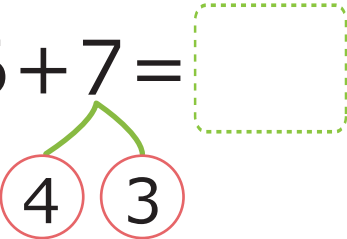
6 1

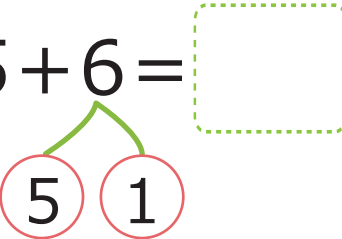
$$(1) 5 + 7 = \square$$


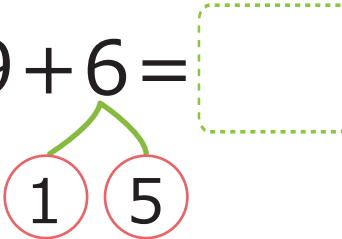
$$(5) 9 + 7 = \square$$


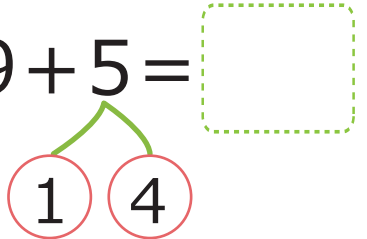
$$(9) 8 + 6 = \square$$


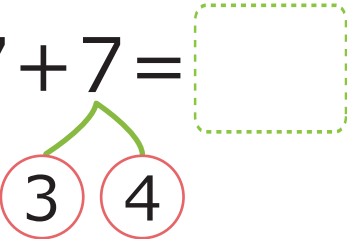
$$(13) 8 + 5 = \square$$


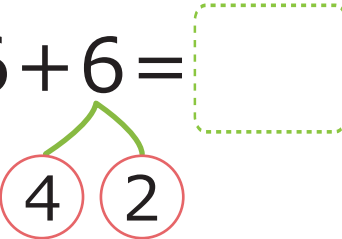
$$(2) 6 + 7 = \square$$


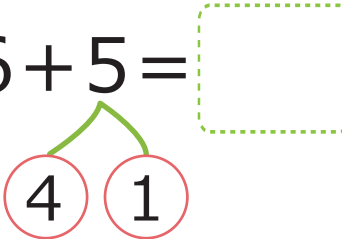
$$(6) 5 + 6 = \square$$


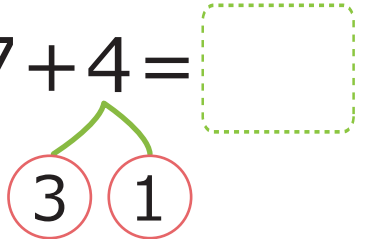
$$(10) 9 + 6 = \square$$


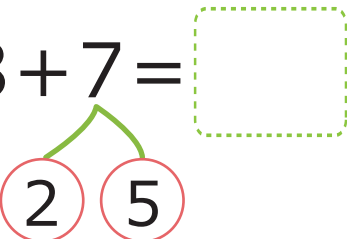
$$(14) 9 + 5 = \square$$


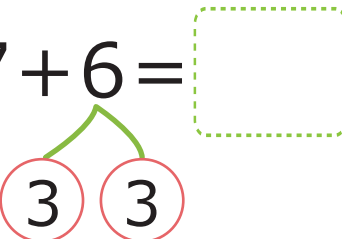
$$(3) 7 + 7 = \square$$


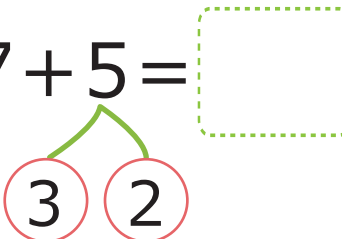
$$(7) 6 + 6 = \square$$


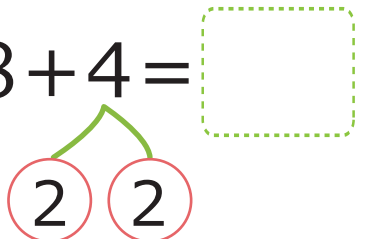
$$(11) 6 + 5 = \square$$


$$(15) 7 + 4 = \square$$


$$(4) 8 + 7 = \square$$


$$(8) 7 + 6 = \square$$


$$(12) 7 + 5 = \square$$


$$(16) 8 + 4 = \square$$


$$(1) 2 + 9 = \square$$

8 1

$$(5) 5 + 6 = \square$$

5 1

$$(9) 9 + 8 = \square$$

1 7

$$(13) 7 + 7 = \square$$

3 4

$$(2) 3 + 8 = \square$$

7 1

$$(6) 6 + 8 = \square$$

4 4

$$(10) 4 + 7 = \square$$

6 1

$$(14) 8 + 7 = \square$$

2 5

$$(3) 4 + 8 = \square$$

6 2

$$(7) 7 + 8 = \square$$

3 5

$$(11) 5 + 7 = \square$$

5 2

$$(15) 9 + 7 = \square$$

1 6

$$(4) 5 + 8 = \square$$

5 3

$$(8) 8 + 8 = \square$$

2 6

$$(12) 6 + 7 = \square$$

4 3

$$(16) 5 + 6 = \square$$

5 1

$$(1) 6 + 6 = \square$$

4 2

$$(5) 6 + 5 = \square$$

4 1

$$(9) 7 + 4 = \square$$

3 1

$$(13) 9 + 3 = \square$$

1 2

$$(2) 7 + 6 = \square$$

3 3

$$(6) 7 + 5 = \square$$

3 2

$$(10) 8 + 4 = \square$$

2 2

$$(14) 9 + 2 = \square$$

1 1

$$(3) 8 + 6 = \square$$

2 4

$$(7) 8 + 5 = \square$$

2 3

$$(11) 9 + 4 = \square$$

1 3

$$(15) 3 + 8 = \square$$

7 1

$$(4) 9 + 6 = \square$$

1 5

$$(8) 9 + 5 = \square$$

1 4

$$(12) 8 + 3 = \square$$

2 1

$$(16) 3 + 9 = \square$$

7 2

$$(1) 4 + 9 = \square$$

6 3

$$(5) 8 + 9 = \square$$

2 7

$$(9) 5 + 6 = \square$$

5 1

$$(13) 4 + 7 = \square$$

6 1

$$(2) 5 + 9 = \square$$

5 4

$$(6) 9 + 9 = \square$$

1 8

$$(10) 7 + 5 = \square$$

3 2

$$(14) 5 + 7 = \square$$

5 2

$$(3) 6 + 9 = \square$$

4 5

$$(7) 5 + 8 = \square$$

5 3

$$(11) 8 + 5 = \square$$

2 3

$$(15) 6 + 6 = \square$$

4 2

$$(4) 7 + 9 = \square$$

3 6

$$(8) 6 + 5 = \square$$

4 1

$$(12) 9 + 5 = \square$$

1 4

$$(16) 7 + 7 = \square$$

3 4

$$(1) 9 + 4 = \square$$

$$(5) 3 + 8 = \square$$

$$(9) 2 + 9 = \square$$

$$(13) 3 + 8 = \square$$

$$(2) 8 + 3 = \square$$

$$(6) 6 + 7 = \square$$

$$(10) 5 + 7 = \square$$

$$(14) 2 + 9 = \square$$

$$(3) 9 + 3 = \square$$

$$(7) 4 + 9 = \square$$

$$(11) 4 + 8 = \square$$


$$(15) 7 + 6 = \square$$


$$(4) 9 + 2 = \square$$


$$(8) 9 + 5 = \square$$


$$(12) 5 + 7 = \square$$


$$(16) 4 + 7 = \square$$


$$(1) 4 + 7 = \square$$



$$(5) 7 + 5 = \square$$



$$(9) 9 + 6 = \square$$



$$(13) 5 + 8 = \square$$



$$(2) 6 + 8 = \square$$



$$(6) 3 + 8 = \square$$



$$(10) 6 + 5 = \square$$



$$(14) 8 + 4 = \square$$



$$(3) 7 + 6 = \square$$



$$(7) 8 + 6 = \square$$



$$(11) 5 + 6 = \square$$


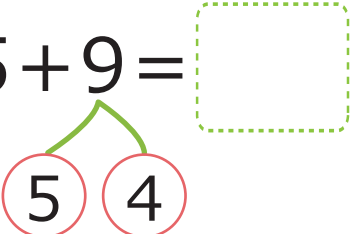
$$(15) 9 + 5 = \square$$


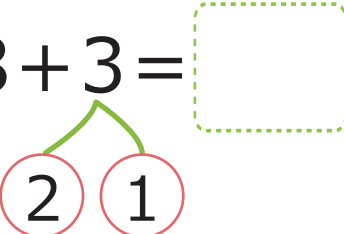
$$(4) 7 + 7 = \square$$


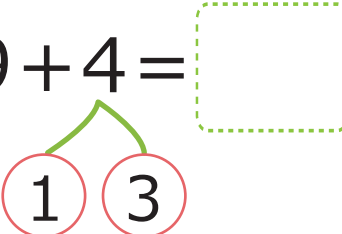
$$(8) 6 + 8 = \square$$


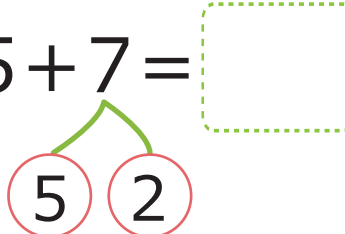
$$(12) 3 + 8 = \square$$


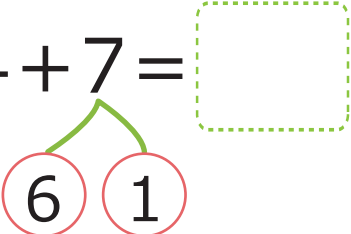
$$(16) 4 + 8 = \square$$


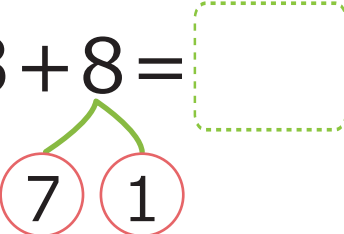
$$(1) 5 + 9 = \square$$


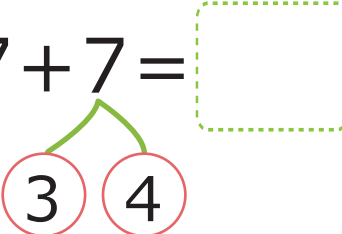
$$(5) 8 + 3 = \square$$


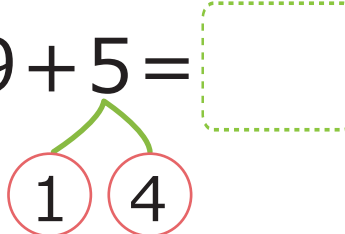
$$(9) 9 + 4 = \square$$


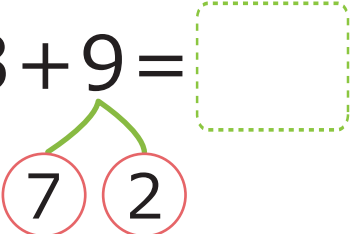
$$(13) 5 + 7 = \square$$


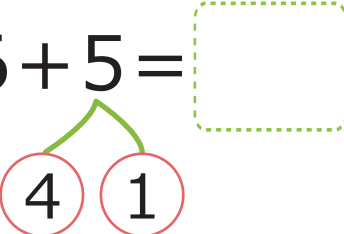
$$(2) 4 + 7 = \square$$


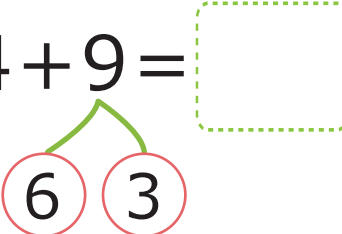
$$(6) 3 + 8 = \square$$


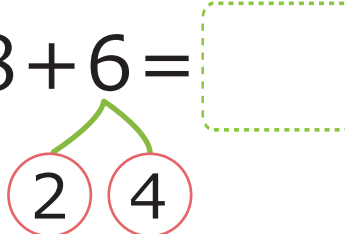
$$(10) 7 + 7 = \square$$


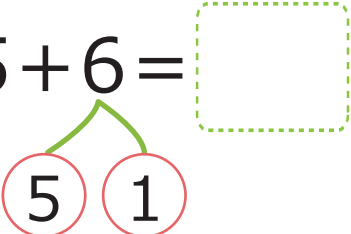
$$(14) 9 + 5 = \square$$


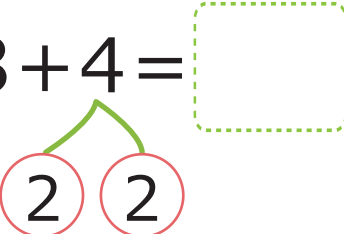
$$(3) 3 + 9 = \square$$


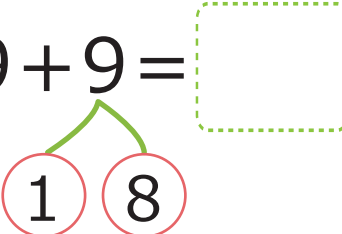
$$(7) 6 + 5 = \square$$



$$(11) 4 + 9 = \square$$


$$(15) 8 + 6 = \square$$


$$(4) 5 + 6 = \square$$


$$(8) 8 + 4 = \square$$


$$(12) 9 + 9 = \square$$


$$(16) 8 + 7 = \square$$




$$(1) 2 + 9 = 11$$

8 1

$$(5) 6 + 9 = 15$$

4 5

$$(9) 3 + 8 = 11$$

7 1

$$(13) 7 + 8 = 15$$

3 5

$$(2) 3 + 9 = 12$$

7 2

$$(6) 7 + 9 = 16$$

3 6

$$(10) 4 + 8 = 12$$

6 2

$$(14) 8 + 8 = 16$$

2 6

$$(3) 4 + 9 = 13$$

6 3

$$(7) 8 + 9 = 17$$

2 7

$$(11) 5 + 8 = 13$$

5 3

$$(15) 9 + 8 = 17$$

1 7

$$(4) 5 + 9 = 14$$

5 4

$$(8) 9 + 9 = 18$$

1 8

$$(12) 6 + 8 = 14$$

4 4

$$(16) 4 + 7 = 11$$

6 1

$$(1) 5 + 7 = 12$$

5 2

$$(5) 9 + 7 = 16$$

1 6

$$(9) 8 + 6 = 14$$

2 4

$$(13) 8 + 5 = 13$$

2 3

$$(2) 6 + 7 = 13$$

4 3

$$(6) 5 + 6 = 11$$

5 1

$$(10) 9 + 6 = 15$$

1 5

$$(14) 9 + 5 = 14$$

1 4

$$(3) 7 + 7 = 14$$

3 4

$$(7) 6 + 6 = 12$$

4 2

$$(11) 6 + 5 = 11$$

4 1

$$(15) 7 + 4 = 11$$

3 1

$$(4) 8 + 7 = 15$$

2 5

$$(8) 7 + 6 = 13$$

3 3

$$(12) 7 + 5 = 12$$

3 2

$$(16) 8 + 4 = 12$$

2 2

$$(1) 2 + 9 = 11$$

8 1

$$(5) 5 + 6 = 11$$

5 1

$$(9) 9 + 8 = 17$$

1 7

$$(13) 7 + 7 = 14$$

3 4

$$(2) 3 + 8 = 11$$

7 1

$$(6) 6 + 8 = 14$$

4 4

$$(10) 4 + 7 = 11$$

6 1

$$(14) 8 + 7 = 15$$

2 5

$$(3) 4 + 8 = 12$$

6 2

$$(7) 7 + 8 = 15$$

3 5

$$(11) 5 + 7 = 12$$

5 2

$$(15) 9 + 7 = 16$$

1 6

$$(4) 5 + 8 = 13$$

5 3

$$(8) 8 + 8 = 16$$

2 6

$$(12) 6 + 7 = 13$$

4 3

$$(16) 5 + 6 = 11$$

5 1

$$(1) 6 + 6 = 12$$

$$(5) 6 + 5 = 11$$

$$(9) 7 + 4 = 11$$

$$(13) 9 + 3 = 12$$

$$(2) 7 + 6 = 13$$

$$(6) 7 + 5 = 12$$

$$(10) 8 + 4 = 12$$

$$(14) 9 + 2 = 11$$

$$(3) 8 + 6 = 14$$

$$(7) 8 + 5 = 13$$

$$(11) 9 + 4 = 13$$

$$(15) 3 + 8 = 11$$

$$(4) 9 + 6 = 15$$

$$(8) 9 + 5 = 14$$

$$(12) 8 + 3 = 11$$

$$(16) 3 + 9 = 12$$

$$(1) 4 + 9 = 13$$

6 3

$$(5) 8 + 9 = 17$$

2 7

$$(9) 5 + 6 = 11$$

5 1

$$(13) 4 + 7 = 11$$

6 1

$$(2) 5 + 9 = 14$$

5 4

$$(6) 9 + 9 = 18$$

1 8

$$(10) 7 + 5 = 12$$

3 2

$$(14) 5 + 7 = 12$$

5 2

$$(3) 6 + 9 = 15$$

4 5

$$(7) 5 + 8 = 13$$

5 3

$$(11) 8 + 5 = 13$$

2 3

$$(15) 6 + 6 = 12$$

4 2

$$(4) 7 + 9 = 16$$

3 6

$$(8) 6 + 5 = 11$$

4 1

$$(12) 9 + 5 = 14$$

1 4

$$(16) 7 + 7 = 14$$

3 4

$$(1) 9 + 4 = 13$$

1 3

$$(5) 3 + 8 = 11$$

7 1

$$(9) 2 + 9 = 11$$

8 1

$$(13) 3 + 8 = 11$$

7 1

$$(2) 8 + 3 = 11$$

2 1

$$(6) 6 + 7 = 13$$

4 3

$$(10) 5 + 7 = 12$$

5 2

$$(14) 2 + 9 = 11$$

8 1

$$(3) 9 + 3 = 12$$

1 2

$$(7) 4 + 9 = 13$$

6 3

$$(11) 4 + 8 = 12$$

6 2

$$(15) 7 + 6 = 13$$

3 3

$$(4) 9 + 2 = 11$$

1 1

$$(8) 9 + 5 = 14$$

1 4

$$(12) 5 + 7 = 12$$

5 2

$$(16) 4 + 7 = 11$$

6 1

$$(1) 4 + 7 = 11$$

A tree diagram with a root node at the top. Two lines branch down to two child nodes. The left child node contains the number 6, and the right child node contains the number 1. Both child nodes are enclosed in red circles.

$$(5) 7 + 5 = 12$$

A tree diagram with a root node at the top. Two lines branch down to two child nodes. The left child node contains the number 3, and the right child node contains the number 2. Both child nodes are enclosed in red circles.

$$(9) 9 + 6 = 15$$

A tree diagram with a root node at the top. Two lines branch down to two child nodes. The left child node contains the number 1, and the right child node contains the number 5. Both child nodes are enclosed in red circles.

$$(13) 5 + 8 = 13$$

A tree diagram with a root node at the top. Two lines branch down to two child nodes. The left child node contains the number 5, and the right child node contains the number 3. Both child nodes are enclosed in red circles.

$$(2) 6 + 8 = 14$$

A tree diagram with a root node at the top. Two lines branch down to two child nodes. Both child nodes contain the number 4. Both child nodes are enclosed in red circles.

$$(6) 3 + 8 = 11$$

A tree diagram with a root node at the top. Two lines branch down to two child nodes. The left child node contains the number 7, and the right child node contains the number 1. Both child nodes are enclosed in red circles.

$$(10) 6 + 5 = 11$$

A tree diagram with a root node at the top. Two lines branch down to two child nodes. The left child node contains the number 4, and the right child node contains the number 1. Both child nodes are enclosed in red circles.

$$(14) 8 + 4 = 12$$

A tree diagram with a root node at the top. Two lines branch down to two child nodes. Both child nodes contain the number 2. Both child nodes are enclosed in red circles.

$$(3) 7 + 6 = 13$$

A tree diagram with a root node at the top. Two lines branch down to two child nodes. Both child nodes contain the number 3. Both child nodes are enclosed in red circles.

$$(7) 8 + 6 = 14$$

A tree diagram with a root node at the top. Two lines branch down to two child nodes. The left child node contains the number 2, and the right child node contains the number 4. Both child nodes are enclosed in red circles.

$$(11) 5 + 6 = 11$$

A tree diagram with a root node at the top. Two lines branch down to two child nodes. The left child node contains the number 5, and the right child node contains the number 1. Both child nodes are enclosed in red circles.

$$(15) 9 + 5 = 14$$

A tree diagram with a root node at the top. Two lines branch down to two child nodes. The left child node contains the number 1, and the right child node contains the number 4. Both child nodes are enclosed in red circles.

$$(4) 7 + 7 = 14$$

A tree diagram with a root node at the top. Two lines branch down to two child nodes. The left child node contains the number 3, and the right child node contains the number 4. Both child nodes are enclosed in red circles.

$$(8) 6 + 8 = 14$$

A tree diagram with a root node at the top. Two lines branch down to two child nodes. Both child nodes contain the number 4. Both child nodes are enclosed in red circles.

$$(12) 3 + 8 = 11$$

A tree diagram with a root node at the top. Two lines branch down to two child nodes. The left child node contains the number 7, and the right child node contains the number 1. Both child nodes are enclosed in red circles.

$$(16) 4 + 8 = 12$$

A tree diagram with a root node at the top. Two lines branch down to two child nodes. The left child node contains the number 6, and the right child node contains the number 2. Both child nodes are enclosed in red circles.

$$(1) 5 + 9 = 14$$

5 4

$$(5) 8 + 3 = 11$$

2 1

$$(9) 9 + 4 = 13$$

1 3

$$(13) 5 + 7 = 12$$

5 2

$$(2) 4 + 7 = 11$$

6 1

$$(6) 3 + 8 = 11$$

7 1

$$(10) 7 + 7 = 14$$

3 4

$$(14) 9 + 5 = 14$$

1 4

$$(3) 3 + 9 = 12$$

7 2

$$(7) 6 + 5 = 11$$

4 1

$$(11) 4 + 9 = 13$$

6 3

$$(15) 8 + 6 = 14$$

2 4

$$(4) 5 + 6 = 11$$

5 1

$$(8) 8 + 4 = 12$$

2 2

$$(12) 9 + 9 = 18$$

1 8

$$(16) 8 + 7 = 15$$

2 5